




Maths Puzzle

Count each of the animals then add the numbers together to find the answer.



$$? + ? + ? + ? = ?$$

- | | | | | | | | | | | | |
|----|----|----|----|----|----|----|----|----|----|----|---|
| 0 | 1 | 2 | 3 | 4 | 5 | 6 | 7 | 8 | 9 | + | - |
| 10 | 11 | 12 | 13 | 14 | 15 | 16 | 17 | 18 | 19 | 20 | = |